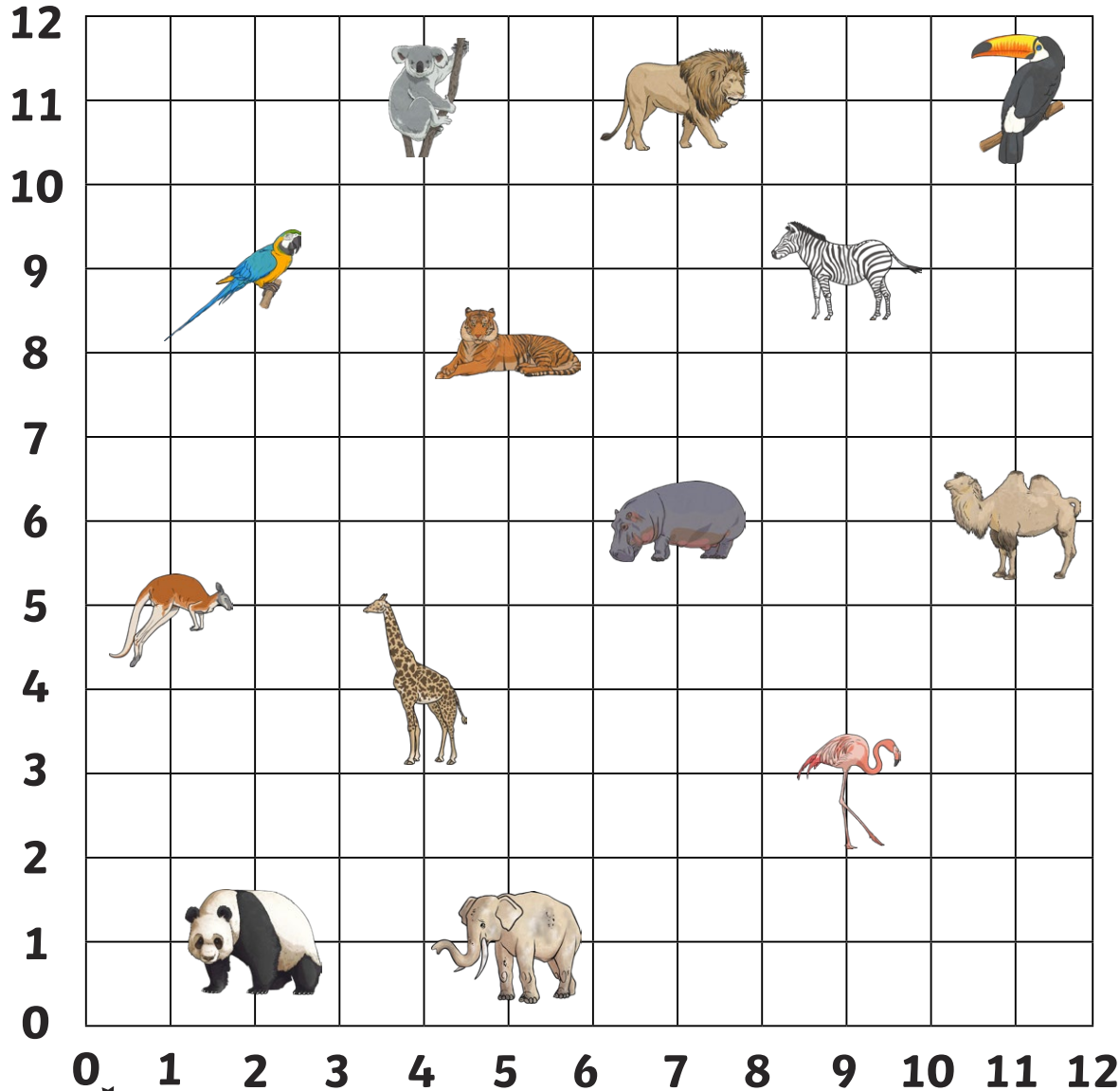


# Zoo Coordinates

Which zoo animal is at the following coordinates?



(7,11) = \_\_\_\_\_ (7,6) = \_\_\_\_\_

(2,1) = \_\_\_\_\_ (11,6) = \_\_\_\_\_

(11,11) = \_\_\_\_\_ (1,5) = \_\_\_\_\_

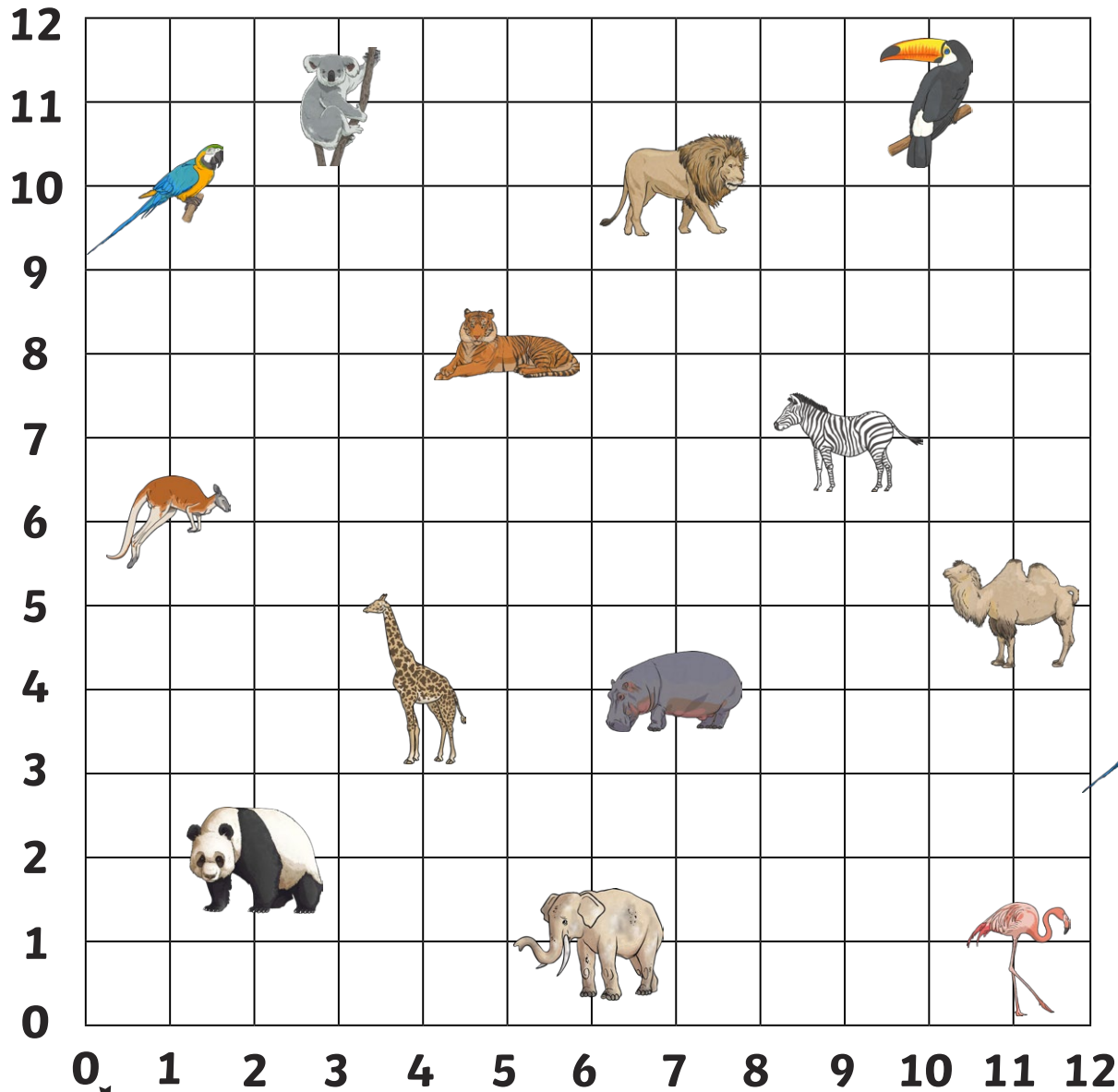
(9,3) = \_\_\_\_\_ (9,9) = \_\_\_\_\_

(4,11) = \_\_\_\_\_ (5,8) = \_\_\_\_\_

|          |          |         |
|----------|----------|---------|
| parrot   | kangaroo | panda   |
| koala    | tiger    | giraffe |
| elephant | flamingo | hippo   |
| camel    | zebra    | lion    |
| toucan   |          |         |




# Zoo Coordinates



Write the coordinates for the zoo animals:



= ( , )



= ( , )



= ( , )




= ( , )



= ( , )



= ( , )



= ( , )



= ( , )



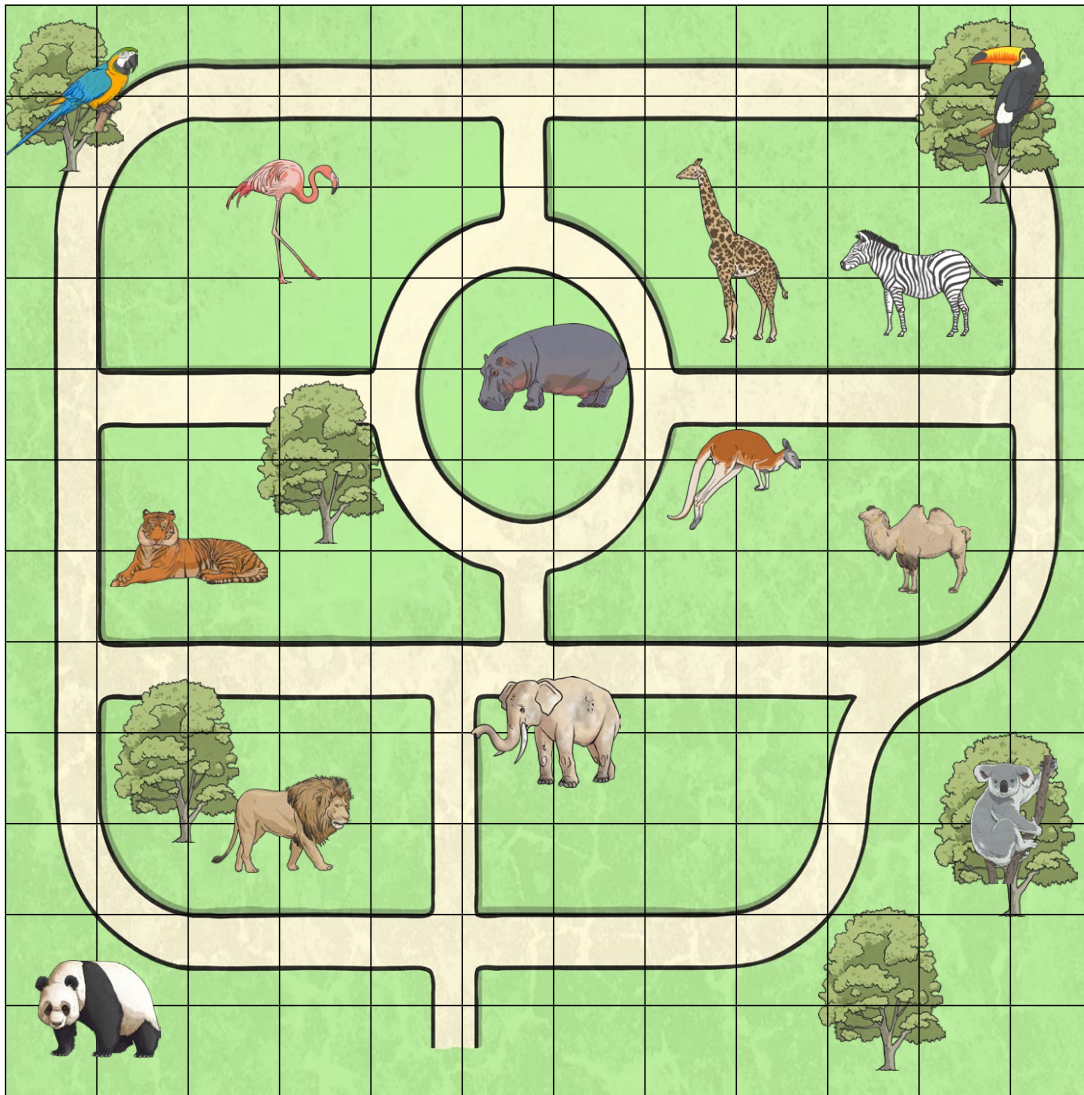
= ( , )



= ( , )

# Zoo Coordinates

12  
11  
10  
9  
8  
7  
6  
5  
4  
3  
2  
1  
0



0 1 2 3 4 5 6 7 8 9 10 11

Which animal is at these coordinates on the zoo map?

(11,11) = \_\_\_\_\_

(2,6) = \_\_\_\_\_

(6,8) = \_\_\_\_\_

(3,10) = \_\_\_\_\_

(11,3) = \_\_\_\_\_

(1,1) = \_\_\_\_\_

Write the coordinates of these animals on the zoo map:



= \_\_\_\_\_



= \_\_\_\_\_



= \_\_\_\_\_



= \_\_\_\_\_



= \_\_\_\_\_



= \_\_\_\_\_

Draw your own zoo animals at these coordinates on the map:

(6,1)

(2,9)

(7,3)

(8,3)

(8,6)











(11,1)

# Zoo Coordinates - Answers



$(7,11)$  = lion  
 $(2,1)$  = panda  
 $(11,11)$  = toucan  
 $(9,3)$  = flamingo  
 $(4,11)$  = koala  
 $(7,6)$  = hippo  
 $(11,6)$  = camel  
 $(1,5)$  = kangaroo  
 $(9,9)$  = zebra  
 $(5,8)$  = tiger









|   |           |   |          |
|---|-----------|---|----------|
|    | = (3,11)  |    | = (4,4)  |
|    | = (7,10)  |    | = (1,6)  |
|    | = (10,11) |    | = (7,4)  |
|   | = (1,10)  |   | = (11,5) |
|  | = (5,8)   |  | = (11,1) |



Which animal is at these coordinates on the zoo map?

$(11,11)$  = toucan       $(2,6)$  = tiger  
 $(6,8)$  = hippo       $(3,10)$  = flamingo  
 $(11,3)$  = koala       $(1,1)$  = panda

Write the coordinates of these animals on the zoo map:

|   |          |   |          |
|---|----------|---|----------|
|   | = (1,11) |    | = (6,4)  |
|  | = (3,3)  |  | = (10,6) |
|  | = (10,9) |  | = (8,7)  |